

I have...



Who has...?

I am a 2D shape.

I have eight straight sides.

I have eight corners.

twinkl.com

I have...



Who has...?

I am a 2D shape.

I have one curved side.

I have no corners.

twinkl.com

I have...



Who has...?


I am a 2D shape.

I have two sides.

I have one curved side and one straight side.

twinkl.com

I have...



Who has...?


I am a 2D shape.

I have five straight sides.

I have five corners.

twinkl.com

I have...



Who has...?

I am a 2D shape.

I have four sides and four corners.

All four sides are the same length.

twinkl.com

I have...



Who has...?


I am a 2D shape.

I have three sides.

I have three corners.

twinkl.com

I have...



Who has...?

I am a 2D shape.

I have four sides and four corners.

I have two longer sides and two shorter sides.

twinkl.com

I have...











Who has...?

I am a 2D shape.

I have six straight sides.

I have six corners.

twinkl.com

	<p>I am a 2D shape. I have three sides. I have three corners.</p>
	<p>I am a 2D shape. I have four sides and four corners. All four sides are the same length.</p>
	<p>I am a 2D shape. I have four sides and four corners. I have two longer sides and two shorter sides.</p>
	<p>I am a 2D shape. I have one curved side. I have no corners.</p>
	<p>I am a 2D shape. I have eight straight sides. I have eight corners.</p>
	<p>I am a 2D shape. I have six straight sides. I have six corners.</p>
	<p>I am a 2D shape. I have five straight sides. I have five corners.</p>
	<p>I am a 2D shape. I have two sides. I have one curved side and one straight side.</p>